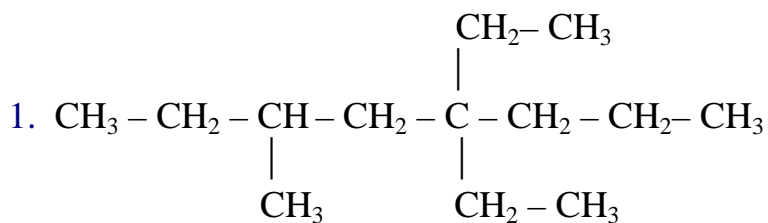


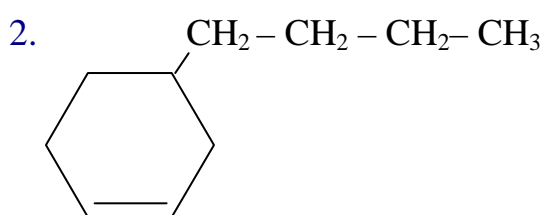
# Test 1

Name the following compounds:



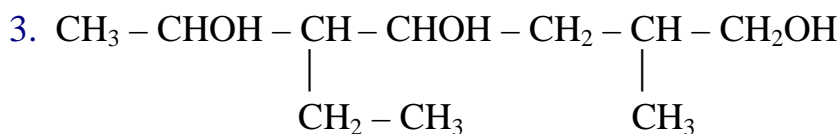
4,5-dietil-3-metiloctano

4,5-diethyl-3-methyloctane



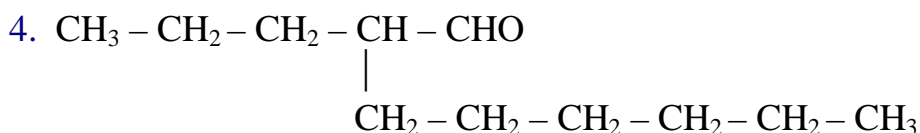
4-butilciclohexeno

4-butylcyclohexene



5-etil-2-metil-1,4,6-heptanotriol

5-ethyl-2-methyl-1,4,6-heptanetriol



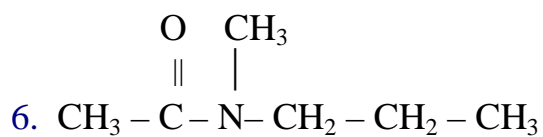
2-hexylpentanal

3-hexyllpentanal



Propanoato de etilo

Ethyl propanoate



N,N-etilmetilbutanamida

N,N-ethylmethylbutamide